

1. Write the multiplication calculation and the repeated addition calculation for each representation.









E.g. 4 lots of 5  
4 groups of 5

$$4 \times 5 = 20 = 5+5+5+5$$

$$5 + 5 + 5 + 5$$

---





Draw a line to match the repeated addition to the correct calculation. They do not all match! If they do not have a matching calculation can you write in the box what it should be?

$3 \times 8$	$8 + 8 + 8 + 8$
$6 \times 8$	$4 + 4 + 4 + 4$
$7 \times 4$	$8 + 8 + 8$
$4 \times 4$	$8 + 8 + 8 + 8 + 8 + 8 + 8$
$8 \times 4$	$3 + 3 + 3 + 3 + 3 + 3 + 3$
$9 \times 8$	$4 + 4 + 4 + 4 + 4 + 4 + 4$
$7 \times 3$	$4 + 4 + 4 + 4 + 4 + 4 + 4 + 4$

Once you have completed matching the calculations and found the ones that don't match, can you now add in the total in each box e.g.  $3 \times 4 = 12$

1. I know that  $23 \times 4$  can't equal 93 without solving this question. Why do I know this?  
What do we know about the 4 x table?

What does  $23 \times 4$  equal and how can you prove it?




2. If there are 8 sausages in a pack and you need 48 for a big barbecue. How many packs will you need to buy?

If each pack costs £4 each how much will you spend in total?



3. What are the free facts that you can make from this calculation ( don't forget  $\div$  too)

$$7 \times 4 = 28$$



$$36 \div 9 = 4$$

4. How many different calculations can you make to prove that  $6 \times 8 = 48$ ?

(You can use  $+$   $-$   $\times$   $\div$  ) Don't forget your understanding of the link between repeated addition and multiplication)

For example:

$$9 \times 4 = 36$$

This is because

$$10 \times 4 = 40$$

$$\text{So } 9 \times 4 = 10 \times 4 - 1 \times 4$$

$$40 - 4$$